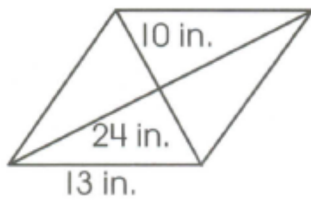


TARGETS D & E

(RHOMBI & KITES)

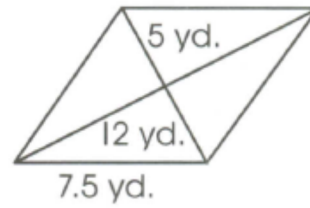
Find the area and perimeter for each rhombus.

1.



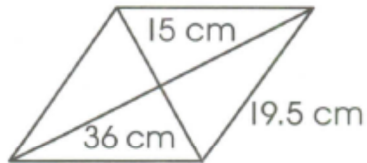
A = _____ P = _____

2.



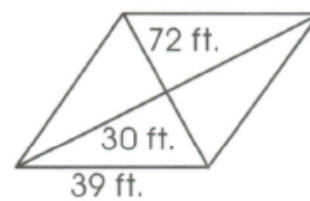
A = _____ P = _____

3.



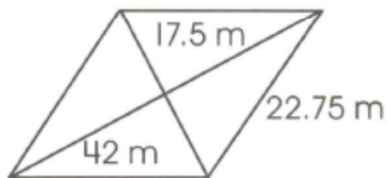
A = _____ P = _____

4.



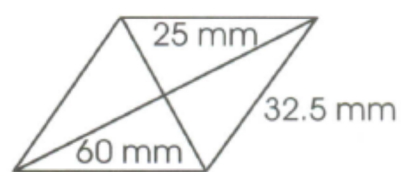
A = _____ P = _____

5.



A = _____ P = _____

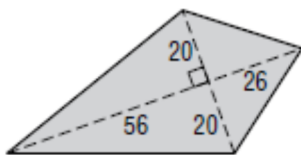
6.



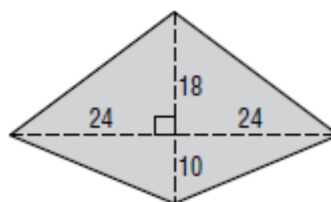
A = _____ P = _____

Find the area and perimeter for each kite.

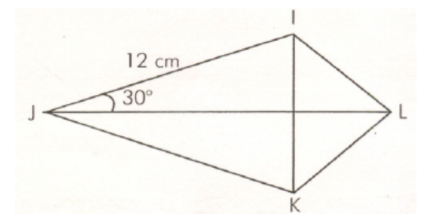
7.



8.



9. JL = 16cm



TARGETS D & E
(RHOMBI & KITES)

ANSWERS

1. $A = 120 \text{ in}^2$ $P = 52 \text{ in}$
2. $A = 30 \text{ yd}^2$ $P = 30 \text{ yd}$
3. $A = 270 \text{ cm}^2$ $P = 78 \text{ cm}$
4. $A = 1,080 \text{ ft}^2$ $P = 156 \text{ ft}$
5. $A = 367.5 \text{ m}^2$ $P = 91 \text{ m}$
6. $A = 750 \text{ mm}^2$ $P = 130 \text{ mm}$
7. 1640
8. 672
9. 96